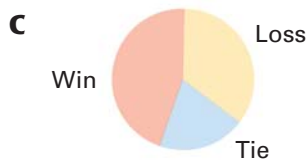
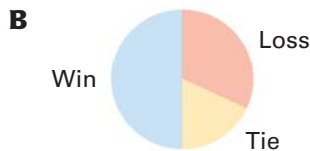
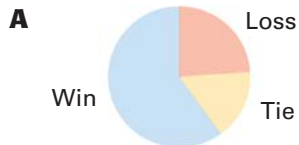


# 13 TAKS PRACTICE

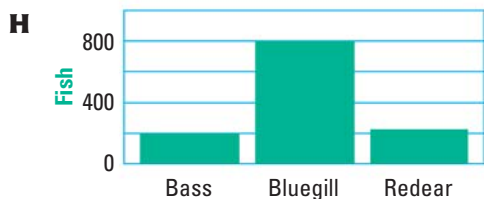
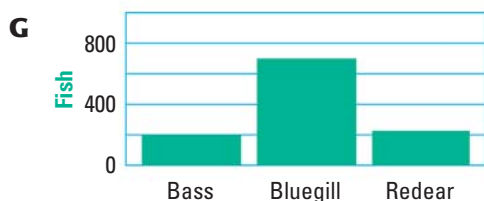
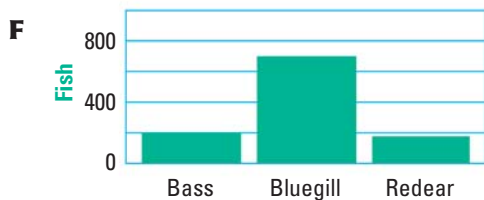
## PRACTICE FOR TAKS OBJECTIVE 9

1. This season your hockey team has won 10 games, lost 6 games, and tied 4 games. Which circle graph best represents the data?



**D** Not here

2. A pond is stocked with 200 bass, 700 bluegill, and 225 redear. Which bar graph best represents the data?



**J** Not here

3. Miss Gorzy surveyed the students in her science classes about the type and number of pets they owned. The table shows the results of the survey.

Type of pet	Percent of total pets
Rabbit	3%
Hamster	8%
Bird	10%
Fish	15%
Dog	24%
Cat	40%

Which circle graph best represents the type and number of pets reported by the students in the survey?

